




Name : _____ Date: _____




Activity 1c

Skip counting by 5's and 10's

Fill in the blanks with the missing numbers.

A.

1.)   _____  Answer: _____

2.)   _____  Answer: _____

B.

3.) 10, 15, __, 25 Answer: _____

4.) 35, 40, __, 50 Answer : _____

5.) 20, 30, 40, __ Answer: _____

6.) 50, 60, 70, __ Answer: _____

7.) 80, __, 100, 110 Answer: _____

8.) 40, 30, __, 10 Answer: _____

9.) 60, __, 40, 30 Answer: _____

10.) 100, 90, __, 70 Answer: _____


Name : _____ Date: _____


Activity 1c

Skip counting by 5's and 10's

Fill in the blanks with the missing numbers.

A.

1.)  Answer: 20

2.)  Answer: 30

B.

3.) 10, 15, __, 25 Answer: 20

4.) 35, 40, __, 50 Answer : 45

5.) 20, 30, 40, __ Answer: 50

6.) 50, 60, 70, __ Answer: 80

7.) 80, __, 100, 110 Answer: 90

8.) 40, 30, __, 10 Answer: 20

9.) 60, __, 40, 30 Answer: 50

10.) 100, 90, __, 70 Answer: 80