

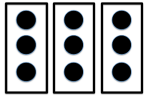







Name : _____ Date: _____

Activity 1b
Skip counting by 3's and 5's

Fill in the blanks with the missing numbers.

A.

1.)    
3 6 _____ 12 Ans : _____

2.)    
5 10 _____ 20 Ans : _____

B.

3.) 18, 21, __, 27 Ans : _____

4.) 33, __, 39, 42 Ans : _____

5.) 42, 45, __, 51 Ans: _____

6.) 60, __, 66, 69 Ans: _____

7.) 5, __, 15, 20 Ans: _____

8.) 25, 30, 35, __ Ans: _____

9.) 40, 45, __, 55 Ans: _____

10.) 75, 80, 90, __ Ans: _____



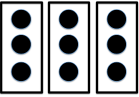

Name : _____ Date: _____

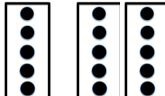



Activity 1b

Skip counting by 3's and 5's

Fill in the blanks with the missing numbers.

A.

1.)    
3 6 _____ 12 Ans : 9

2.)    
5 10 _____ 20 Ans : 15

B.

3.) 18, 21, __, 27 Ans : 24

4.) 33, __, 39, 42 Ans : 36

5.) 42, 45, __, 51 Ans: 48

6.) 60, __, 66, 69 Ans: 63

7.) 5, __, 15, 20 Ans: 10

8.) 25, 30, 35, __ Ans: 40

9.) 40, 45, __, 55 Ans: 50

10.) 75, 80, 90, __ Ans: 95